

Quiz 4d

Name:

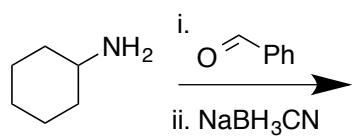
Signature:

Recitation Instructor:

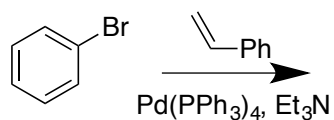
Start 5 minutes in, 30 minutes total... as always Good luck!.

1. Predict the products of the following reactions (4 points each)

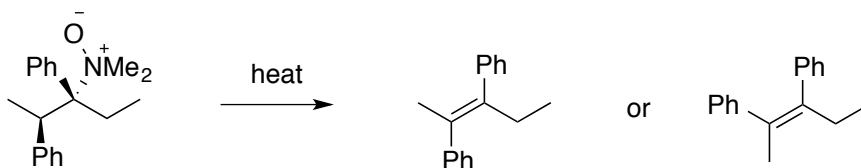
A.



B.



2. Predict which of the following diastereomers could be more likely to form and explain your answer (6 points).



3. Show a synthesis for the following (6 points)

